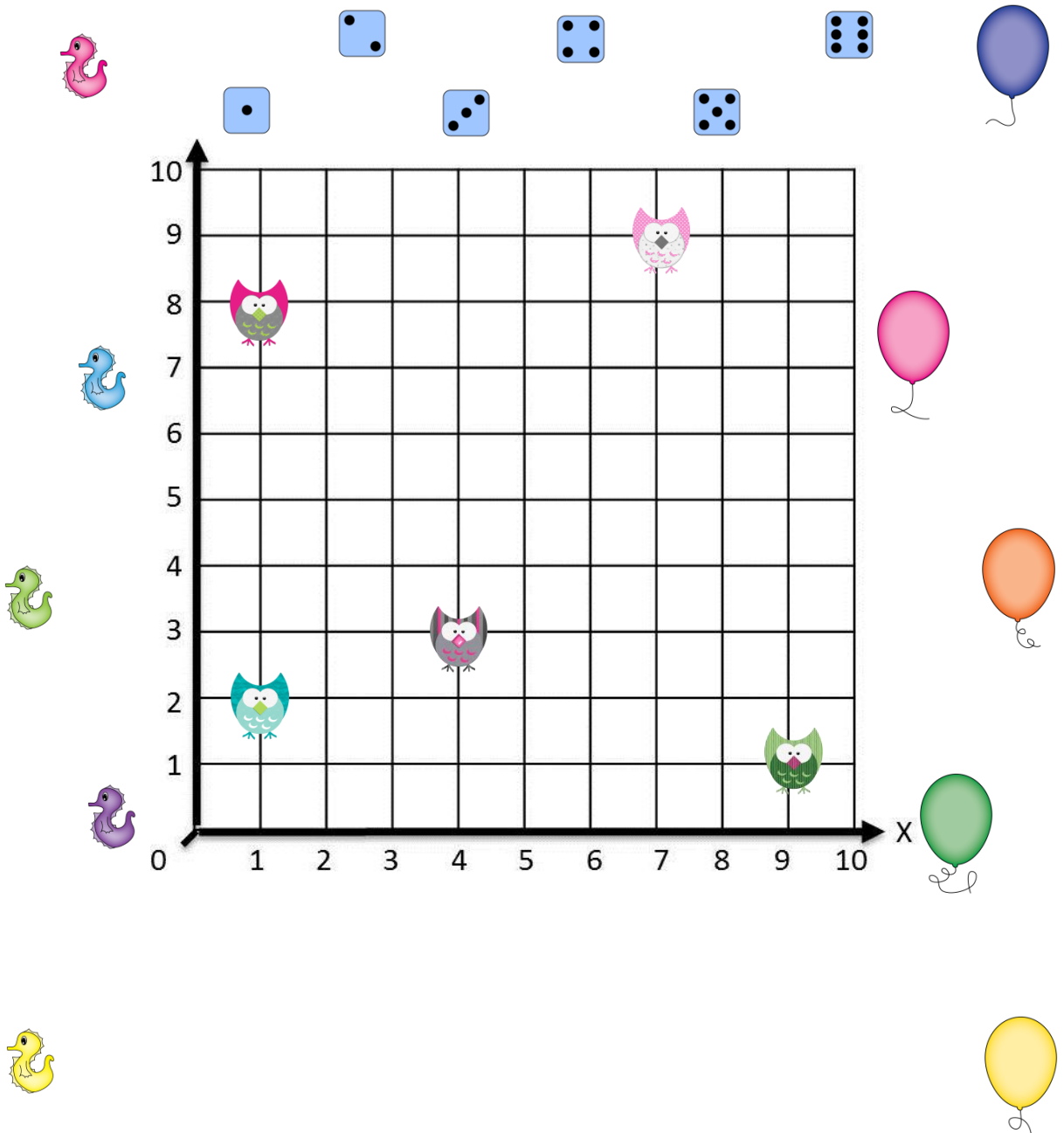


Coordinate & Mapping Skills

12 different tasks over 4 levels



Level 1 – Card 3
© BaysideTeacher

State the coordinates of the following:

- (,)
- (,)
- (,)
- (,)
- (,)

Level 2 – Card 2
© BaysideTeacher

State the coordinates of the following:

- (,)
- (,)
- (,)
- (,)
- (,)

Level 2 – Card 3
© BaysideTeacher

State the coordinates of the following:

- (,)
- (,)
- (,)

Level 1 – Card 3 Answers
© BaysideTeacher

State the coordinates of the following:

- (1 , 8)
- (6 , 6)
- (8 , 3)
- (9 , 1)
- (4 , 1)

Level 1 – Card 1 Answers
© BaysideTeacher

State the coordinates of the following:

- (7 , 9)
- (1 , 8)
- (4 , 1)

Level 2 – Card 3 Answers
© BaysideTeacher

State the coordinates of the following:

- (14 , 0)
- (8 , 8)
- (5 , 3)

Level 1 – Card 2
© BaysideTeacher

State the coordinates of the following:

- (,)
- (,)
- (,)
- (,)
- (,)

Level 1 – Card 2 Answers
© BaysideTeacher

State the coordinates of the following:

- (10 , 10)
- (3 , 1)
- (6 , 7)

Coordinate & Mapping Skills
12 different tasks over 4 levels

© BaysideTeacher

Level 2 – Card 1
© BaysideTeacher

State the coordinates of the following:

- (,)
- (,)
- (,)
- (,)
- (,)

Level 2 – Card 1 Answers
© BaysideTeacher

State the coordinates of the following:

- (1 , 1)
- (2 , 2)
- (3 , 3)
- (4 , 4)
- (5 , 5)

Level 3 – Card 3
© BaysideTeacher

State the coordinates of the following:

- (,)
- (,)
- (,)
- (,)
- (,)

Level 3 – Card 3 Answers
© BaysideTeacher

State the coordinates of the following:

- (3 , 1)
- (-4 , -2)
- (-3 , 2)
- (2 , 0)
- (0 , -3)

Level 4 – Card 2
© BaysideTeacher

State the coordinates of the following:

- (,)
- (,)
- (,)
- (,)
- (,)
- (,)

Level 4 – Card 2 Answers
© BaysideTeacher

State the coordinates of the following:

- (-7 , -3)
- (6 , -5)
- (5 , 1)
- (-6 , 6)
- (-2 , 7)
- (7 , 5)

Level 3 – Card 1 Answers
© BaysideTeacher

State the coordinates of the following:

- (3 , 1)
- (-4 , -2)
- (-3 , 2)
- (2 , 0)
- (0 , -3)

Level 3 – Card 2
© BaysideTeacher

State the coordinates of the following:

- (,)
- (,)
- (,)
- (,)
- (,)

Level 3 – Card 2 Answers
© BaysideTeacher

State the coordinates of the following:

- (0 , 3)
- (1 , -3)
- (-4 , -3)
- (4 , -2)
- (-1 , 1)

Level 4 – Card 3
© BaysideTeacher

State the coordinates of the following:

- (,)
- (,)
- (,)
- (,)
- (,)
- (,)

Level 4 – Card 3 Answers
© BaysideTeacher

State the coordinates of the following:

- (-6 , -3)
- (2 , -4)
- (3 , 5)
- (0 , 7)
- (-8 , 2)
- (-2 , 0)

Level 4 – Card 1
© BaysideTeacher

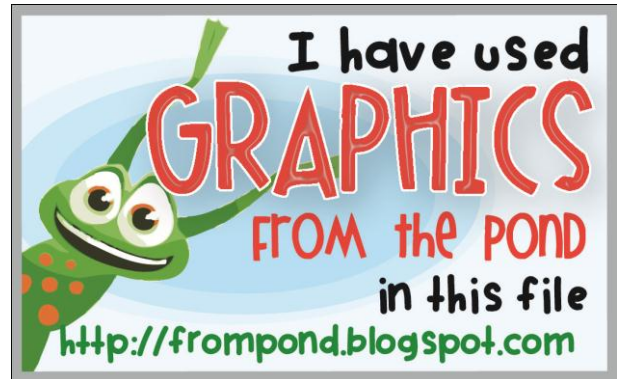
State the coordinates of the following:

- (,)
- (,)
- (,)
- (,)
- (,)
- (,)

Level 4 – Card 1 Answers
© BaysideTeacher

State the coordinates of the following:


- (-2 , -7)
- (7 , 1)
- (4 , -6)
- (-4 , 2)
- (2 , 4)
- (-5 , -4)



Thank you so much for purchasing this item of mine – I really appreciate your business! I hope you and your students enjoy these resources.

Please leave feedback once you have tried it out. You can also email me any requests or changes you would like made at australianbaysideteacher@gmail.com.

For lots of freebies, ideas, classroom tips & tricks, you can visit my blog at <http://baysideteacher.blogspot.com.au/>



© 2012 BaysideTeacher. All rights reserved.

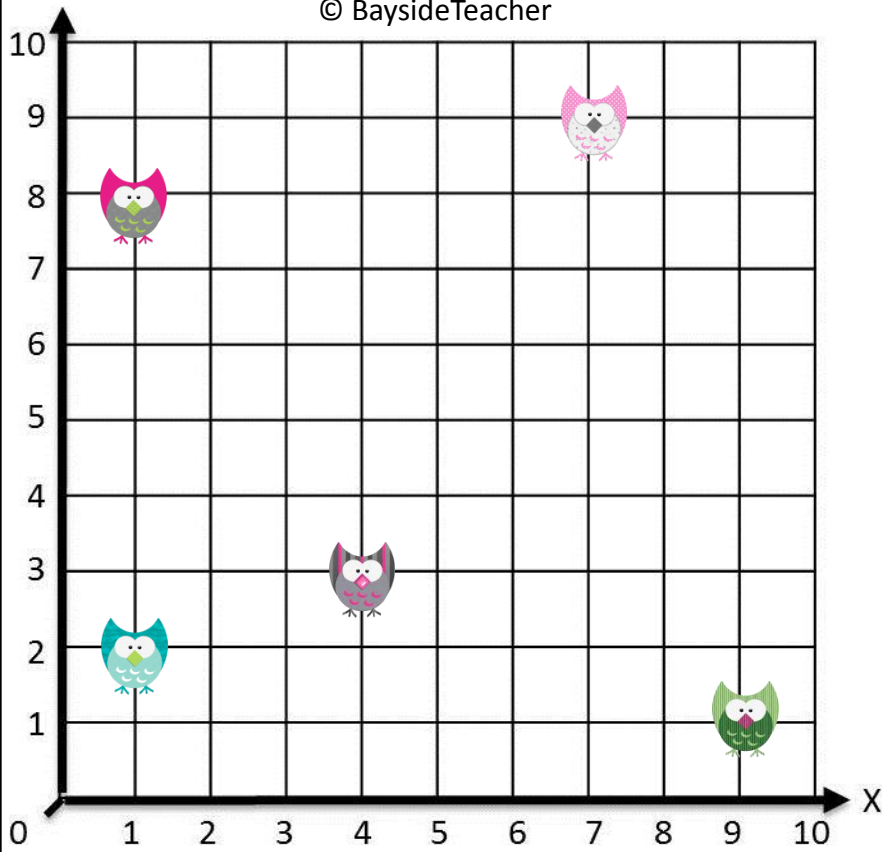
The original purchaser is granted permission to reproduce these pages in limited quantities for their own classroom use only.

Duplication for an entire grade level, school, school system or for commercial purposes is strictly forbidden without written permission from the publisher. Redistributing, editing, selling, or posting this item or any part thereof on the Internet (even a personal/classroom website) is strictly forbidden and is a violation of the Digital Millennium Copyright Act (DMCA). Published

2012 by: BaysideTeacher, Brisbane, Queensland, Australia. australianbaysideteacher@gmail.com

Level 1 – Card 1

© BaysideTeacher



State the coordinates of the following:

a)  (,)

b)  (,)

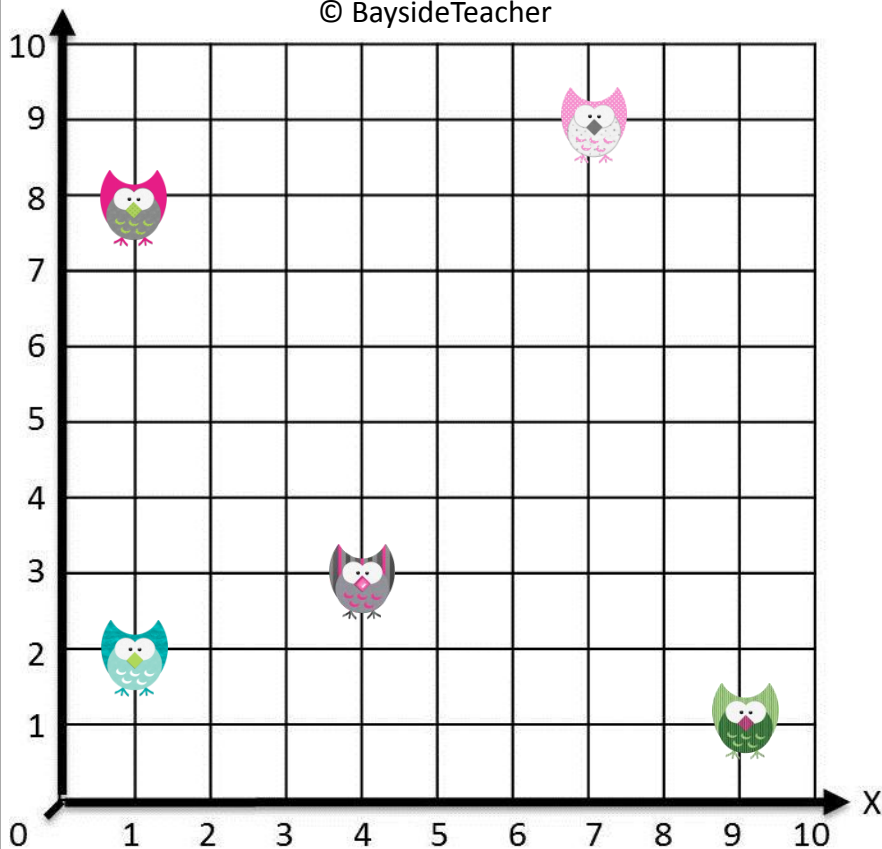
c)  (,)

d)  (,)

e)  (,)

Level 1 – Card 1 Answers


© BaysideTeacher



State the coordinates of the following:

a)  (7 , 9)

b)  (1 , 8)

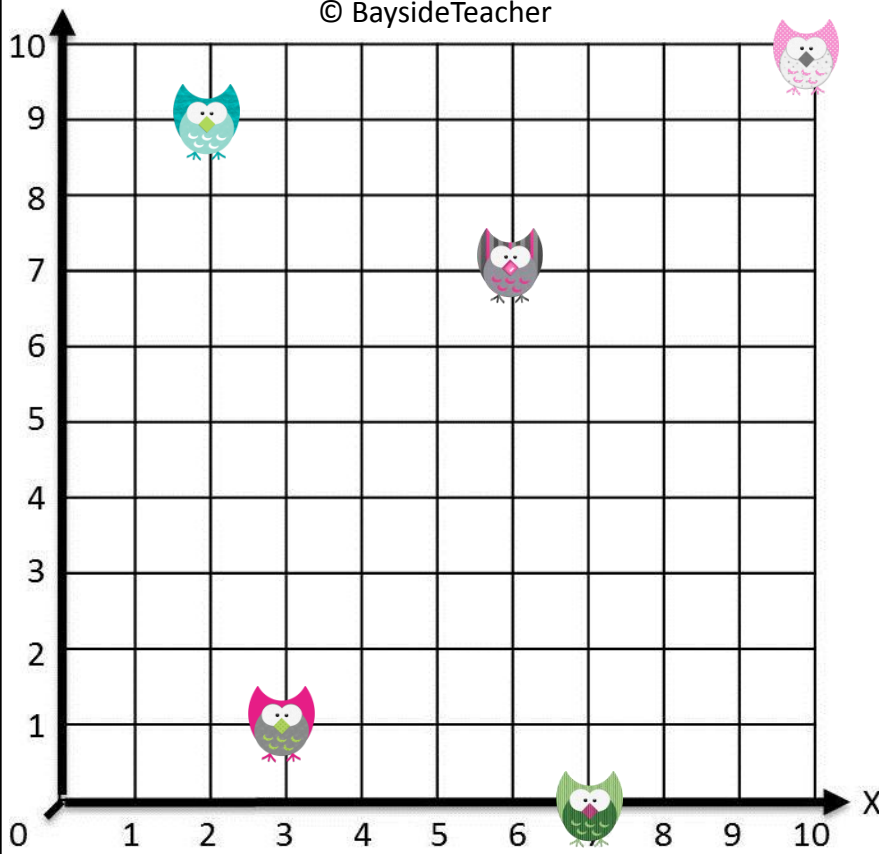
c)  (4 , 3)

d)  (1 , 2)






e)  (9 , 1)

Level 1 – Card 2

© BaysideTeacher

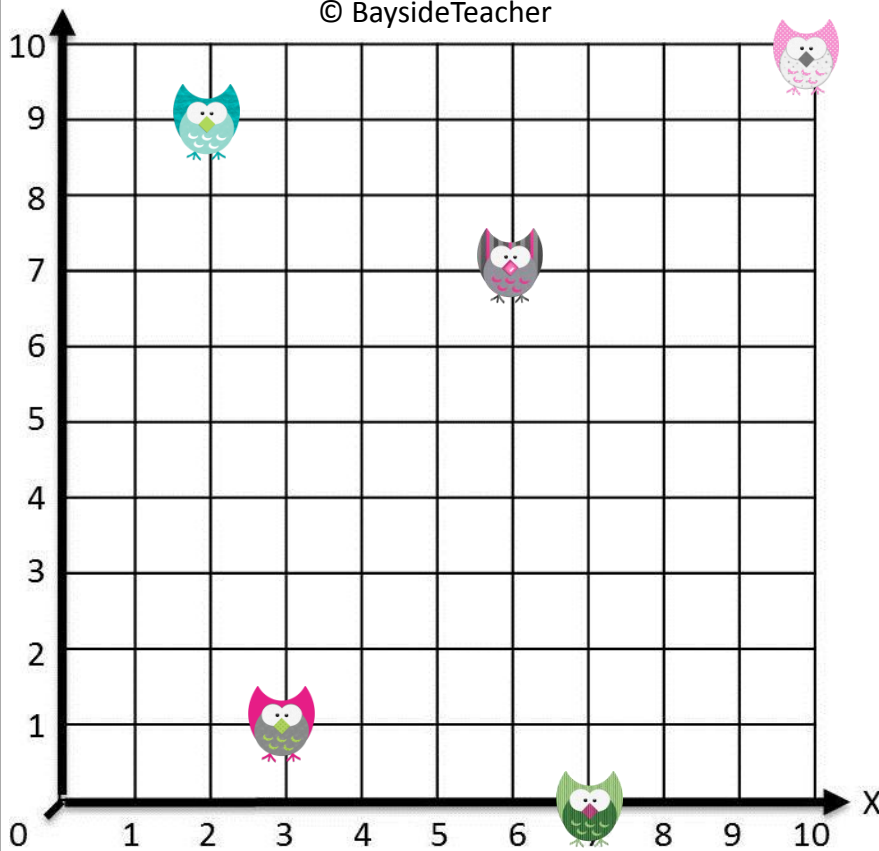


State the coordinates of the following:



- a)  (,)
- b)  (,)
- c)  (,)
- d)  (,)
- e)  (,)

Level 1 – Card 2 Answers

© BaysideTeacher

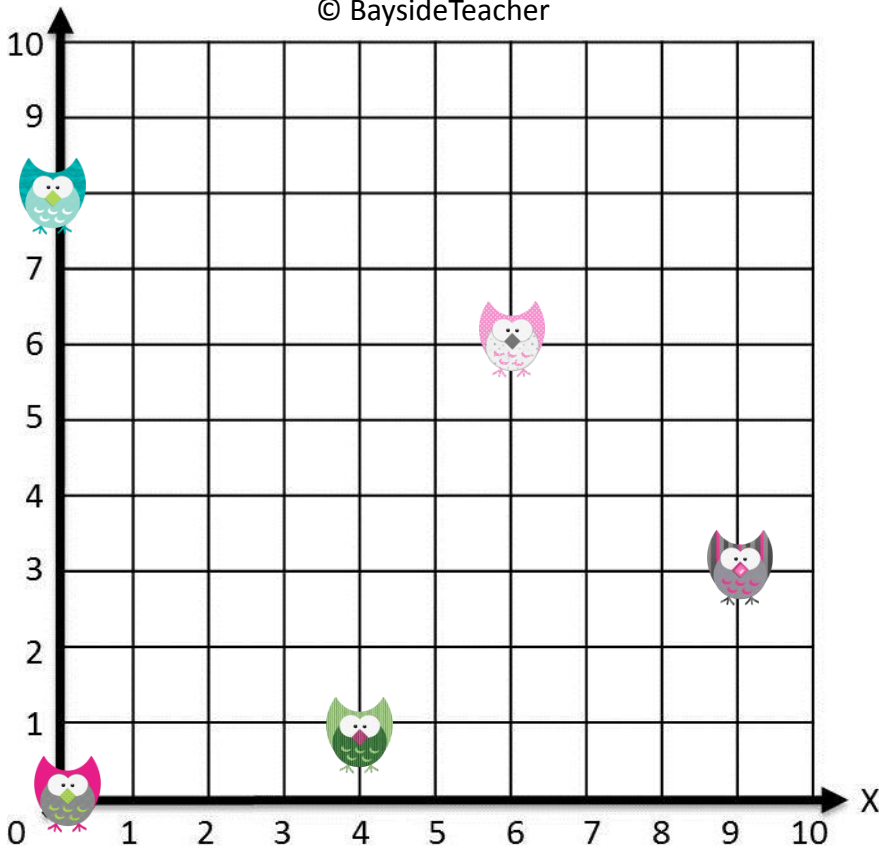


State the coordinates of the following:






- a)  (10 , 10)
- b)  (3 , 1)
- c)  (6 , 7)
- d)  (2 , 9)
- e)  (7 , 0)

Level 1 – Card 3

© BaysideTeacher

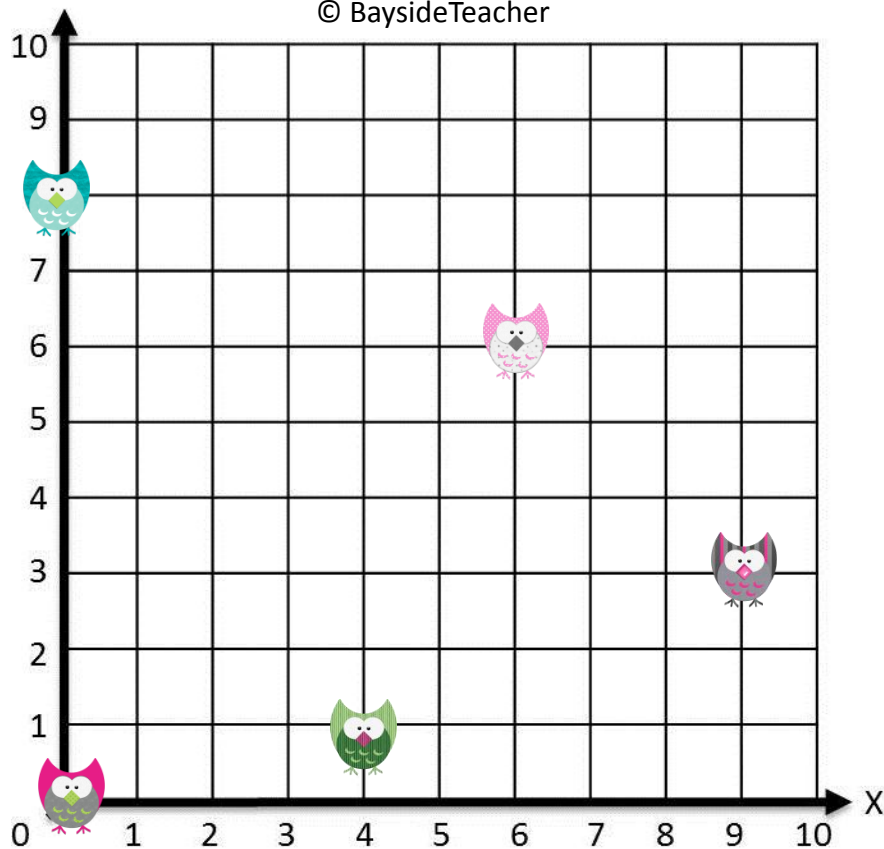


State the coordinates of the following:






- a)  (,)
- b)  (,)
- c)  (,)
- d)  (,)
- e)  (,)

Level 1 – Card 3 Answers

© BaysideTeacher

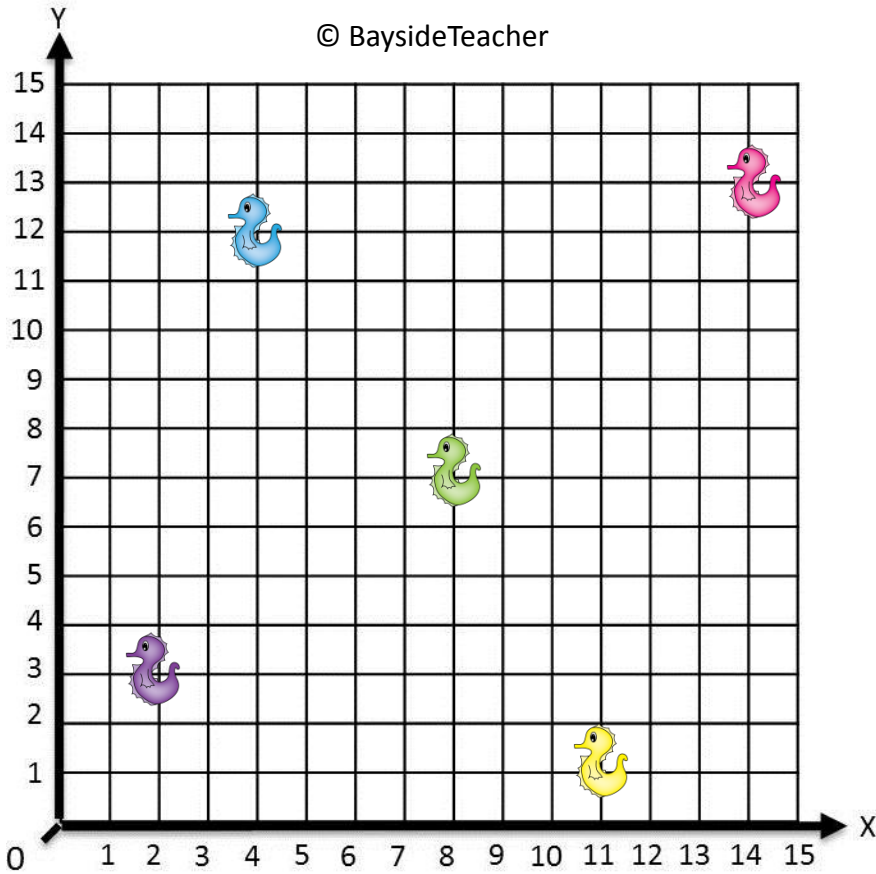


State the coordinates of the following:

- a)  (6 , 6)
- b)  (0 , 0)
- c)  (9 , 3)
- d)  (0 , 8)
- e)  (4 , 1)

Level 2 – Card 1

© BaysideTeacher



State the coordinates of the following:

a)  (,)

b)  (,)

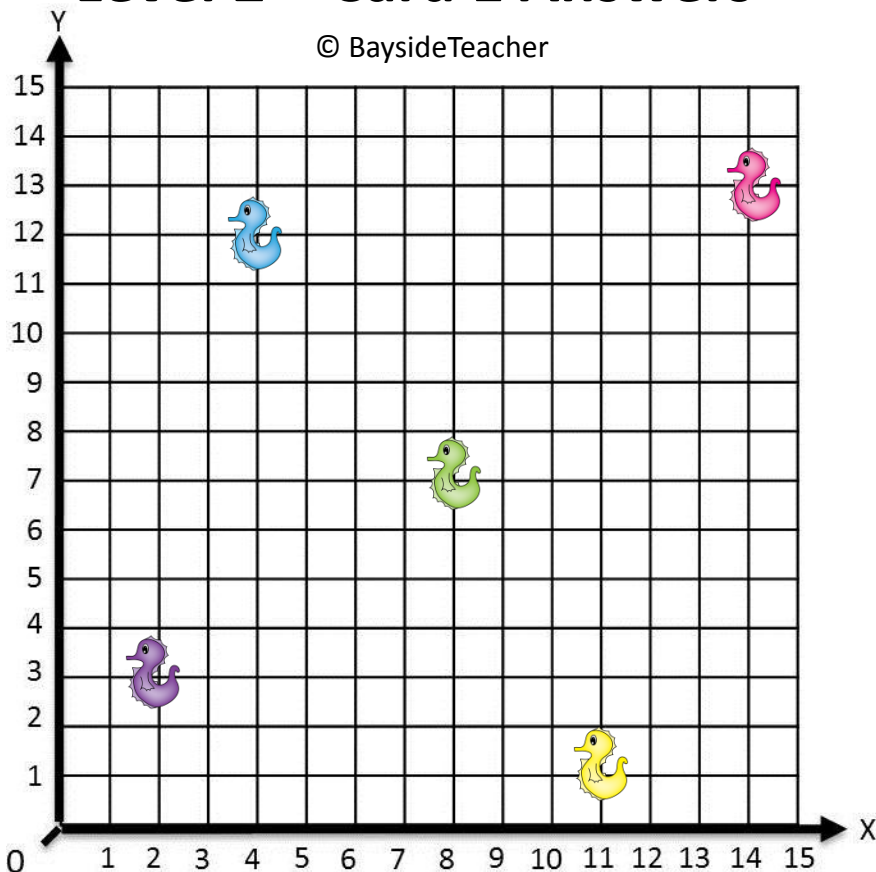
c)  (,)

d)  (,)


e)  (,)


Level 2 – Card 1 Answers

© BaysideTeacher




State the coordinates of the following:

a)  (14 , 13)

b)  (4 , 12)

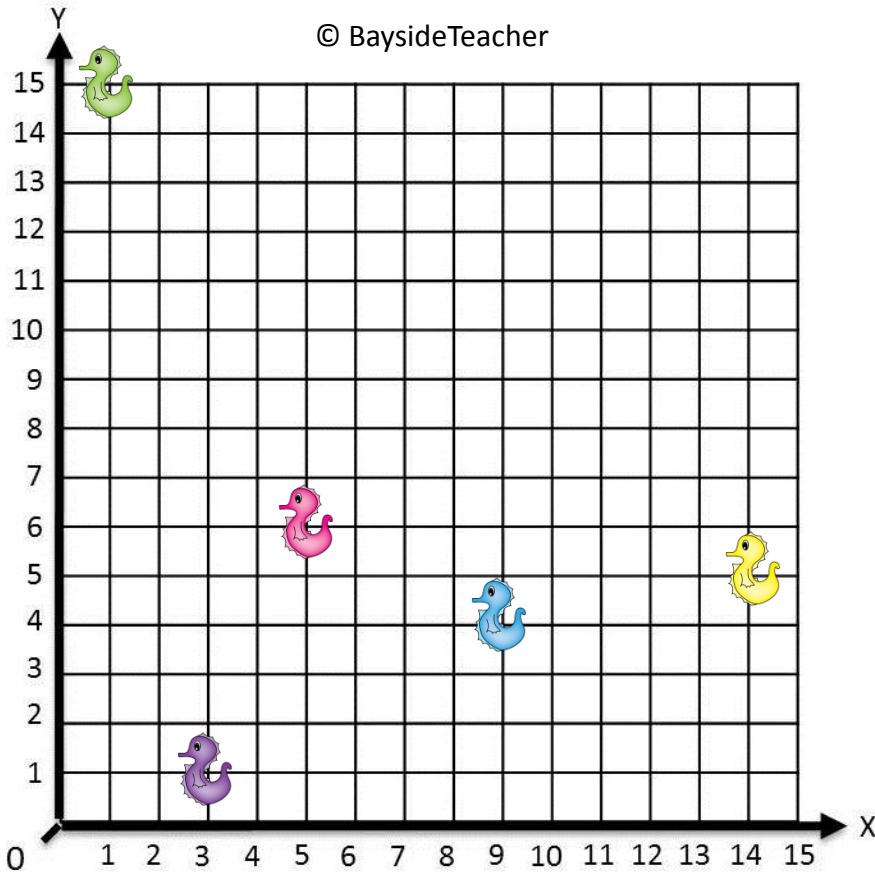
c)  (8 , 7)

d)  (2 , 3)

e)  (11 , 1)

Level 2 – Card 2

© BaysideTeacher



State the coordinates of the following:

a)  (,)

b)  (,)

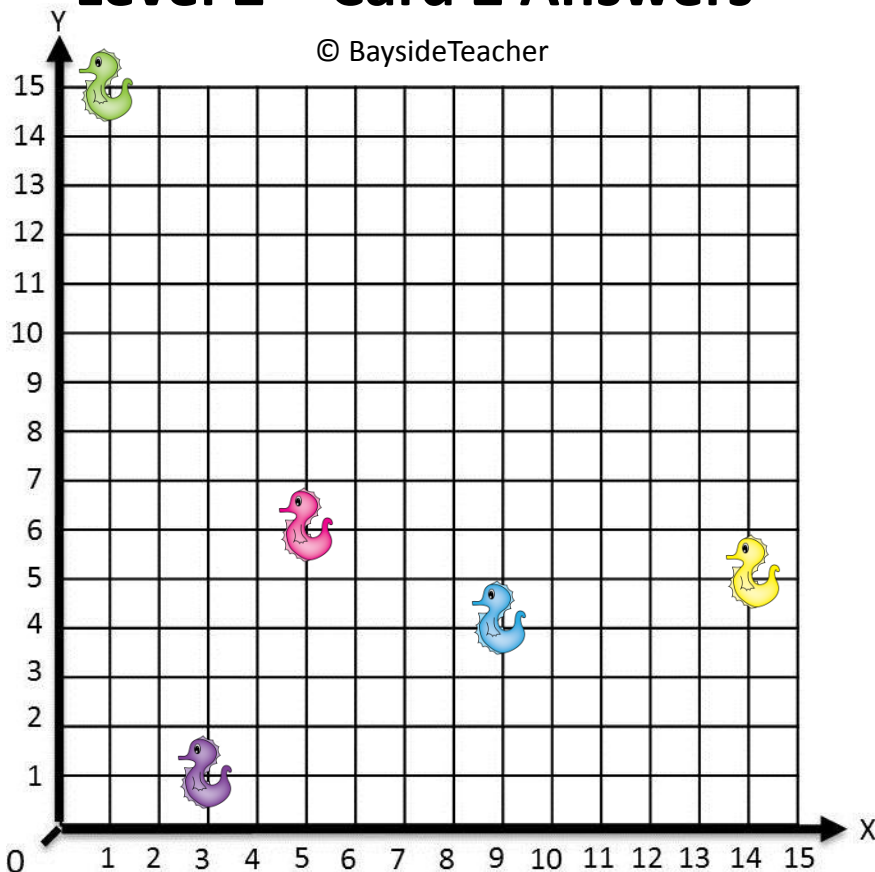
c)  (,)

d)  (,)


e)  (,)

Level 2 – Card 2 Answers


© BaysideTeacher



State the coordinates of the following:

a)  (5 , 6)

b)  (9 , 4)

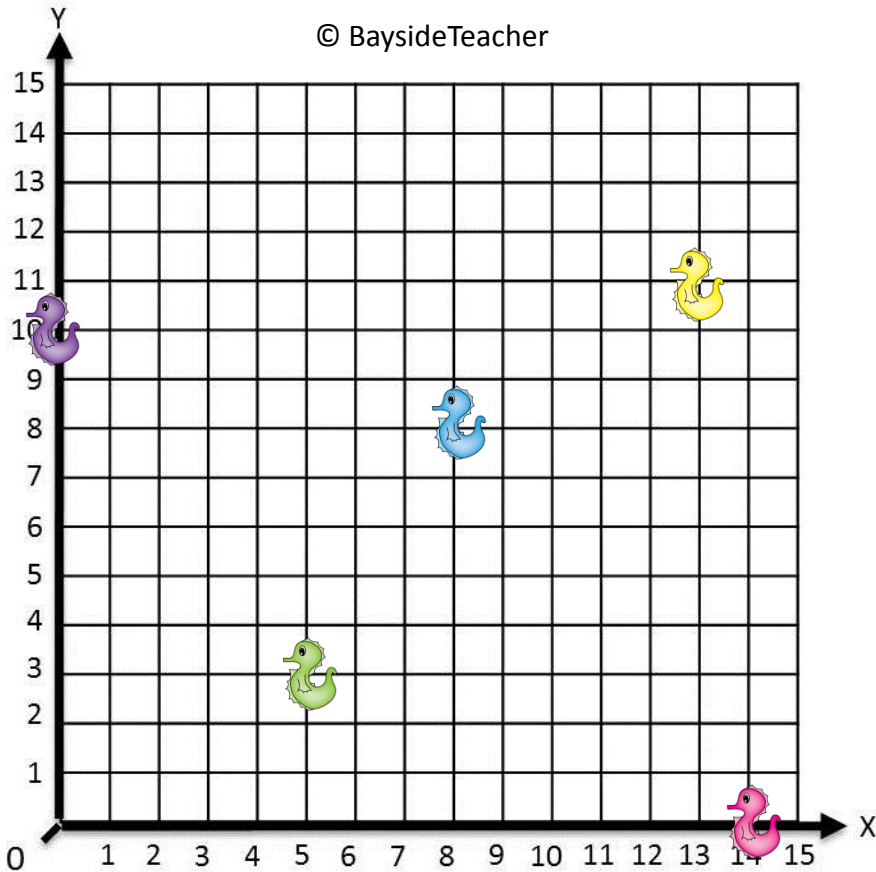
c)  (1 , 15)

d)  (3 , 1)






e)  (14 , 5)

Level 2 – Card 3

© BaysideTeacher

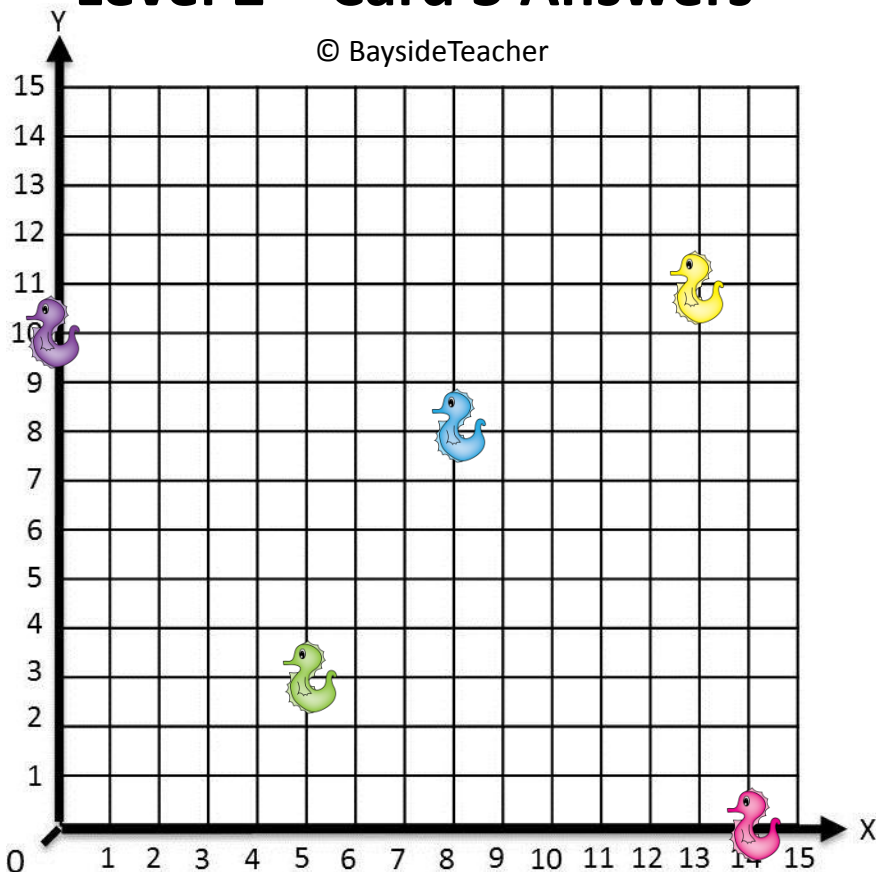


State the coordinates of the following:






- a)  (,)
- b)  (,)
- c)  (,)
- d)  (,)
- e)  (,)

Level 2 – Card 3 Answers

© BaysideTeacher

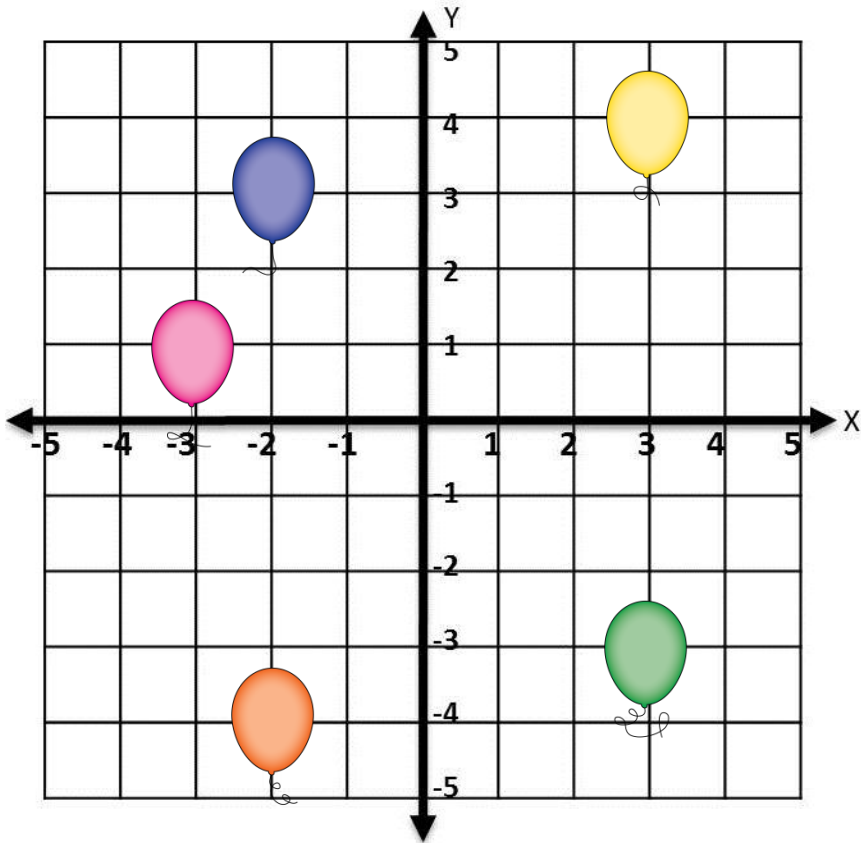


State the coordinates of the following:

- a)  (14 , 0)
- b)  (8 , 8)
- c)  (5 , 3)
- d)  (0 , 10)
- e)  (13 , 11)


Level 3 – Card 1


© BaysideTeacher



State the coordinates of the following:

a)  (,)

b)  (,)

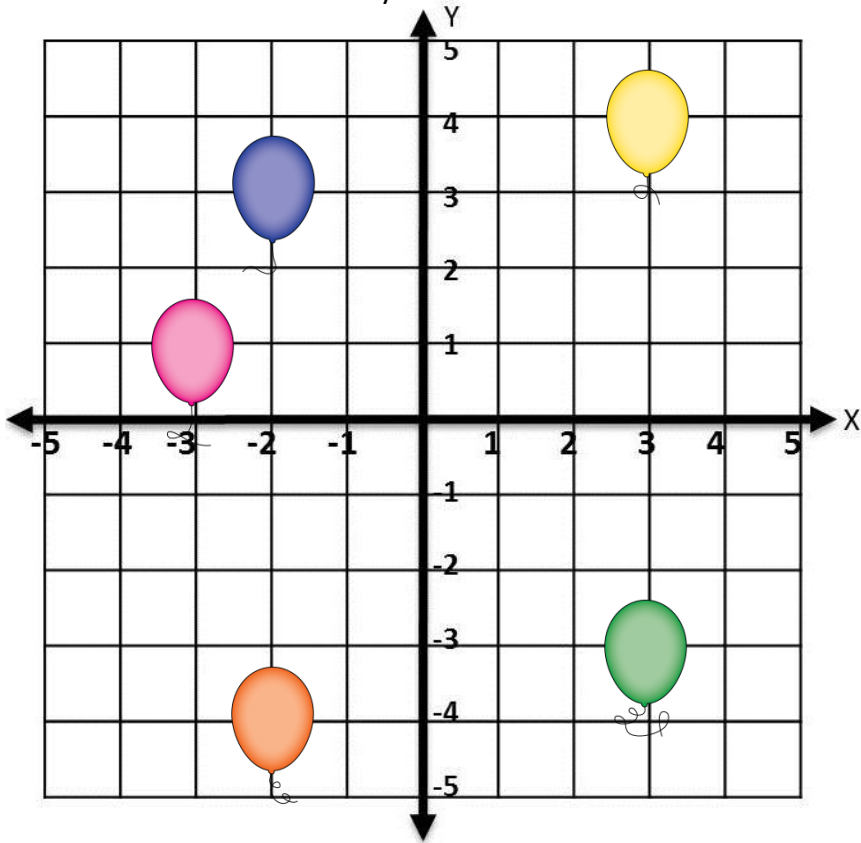
c)  (,)

d)  (,)


e)  (,)


Level 3 – Card 1 Answers


© BaysideTeacher




State the coordinates of the following:

a)  (3 , 4)

b)  (-2 , 3)

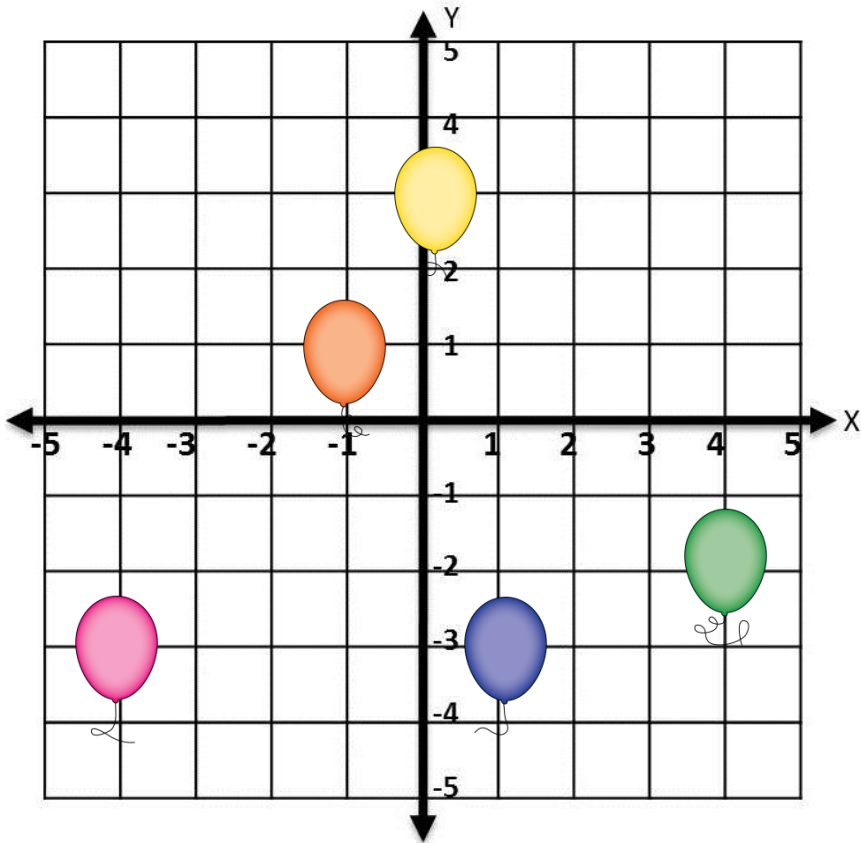
c)  (-3 , 1)

d)  (3 , -3)






e)  (-2 , -4)

Level 3 – Card 2

© BaysideTeacher

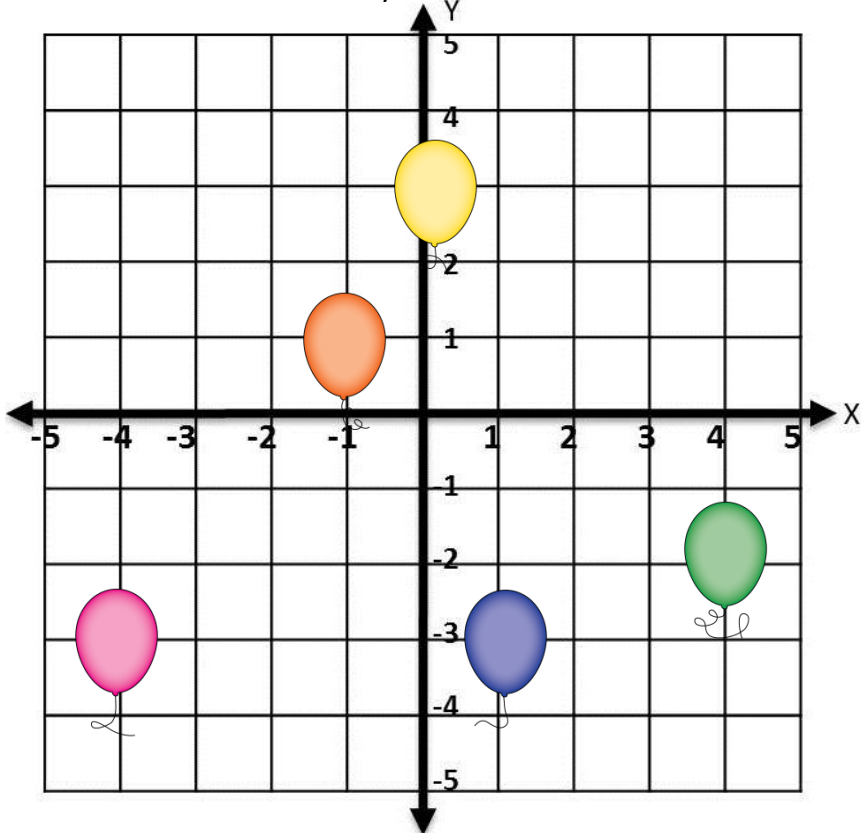


State the coordinates of the following:






- a)  (,)
- b)  (,)
- c)  (,)
- d)  (,)
- e)  (,)

Level 3 – Card 2 Answers

© BaysideTeacher

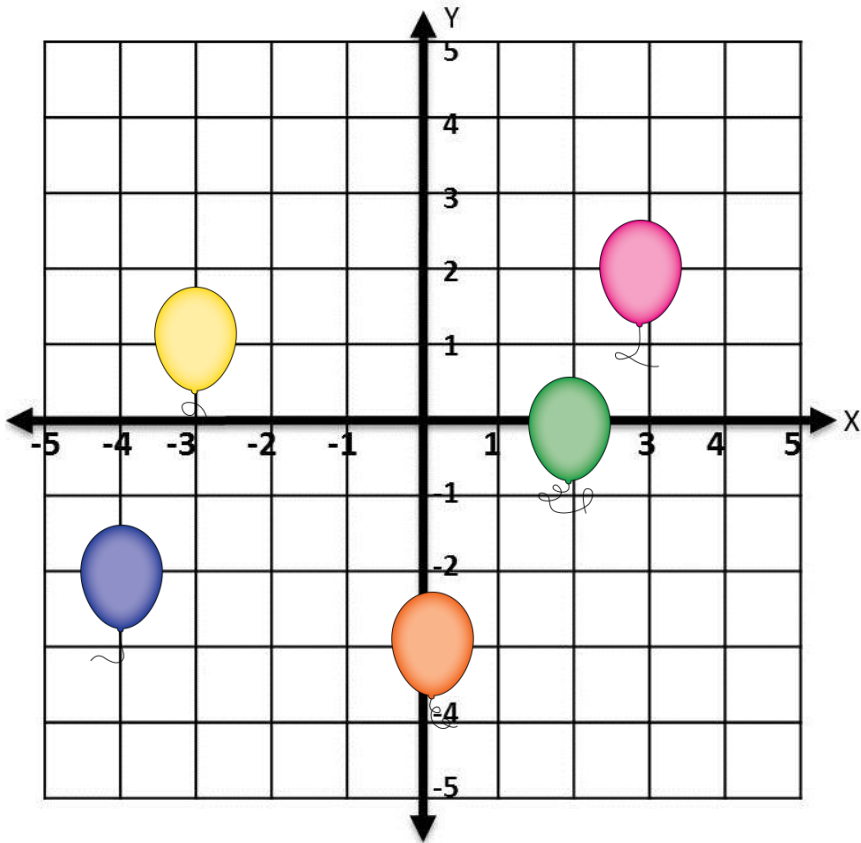


State the coordinates of the following:






- a)  (0 , 3)
- b)  (1 , -3)
- c)  (-4 , -3)
- d)  (4 , -2)
- e)  (-1 , 1)

Level 3 – Card 3

© BaysideTeacher

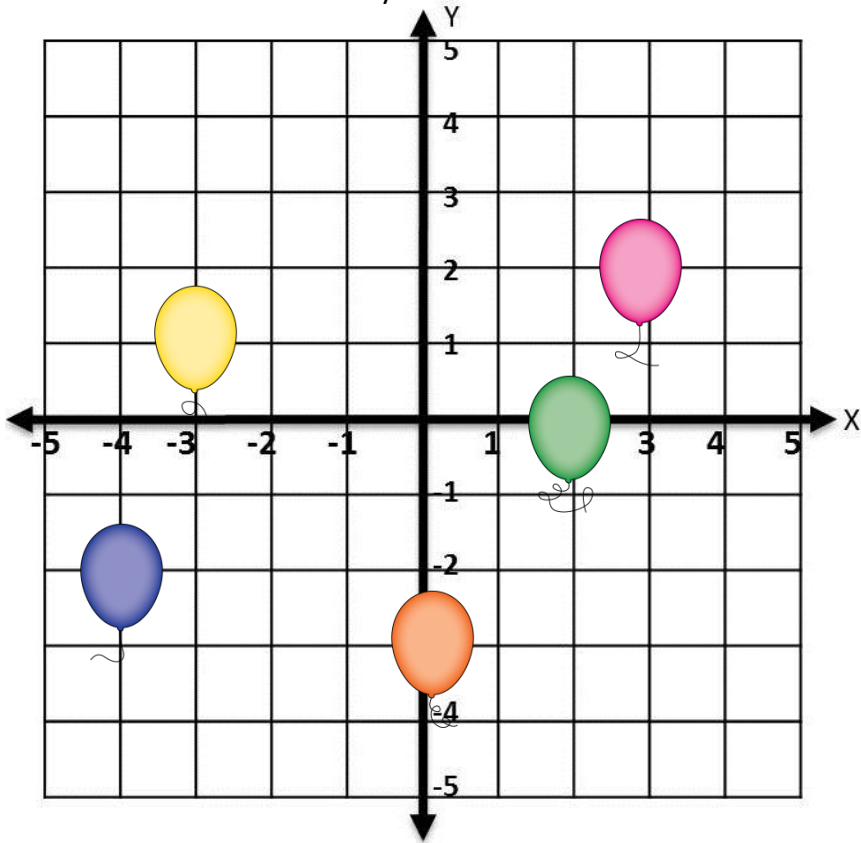


State the coordinates of the following:






- a)  (,)
- b)  (,)
- c)  (,)
- d)  (,)
- e)  (,)

Level 3 – Card 3 Answers

© BaysideTeacher

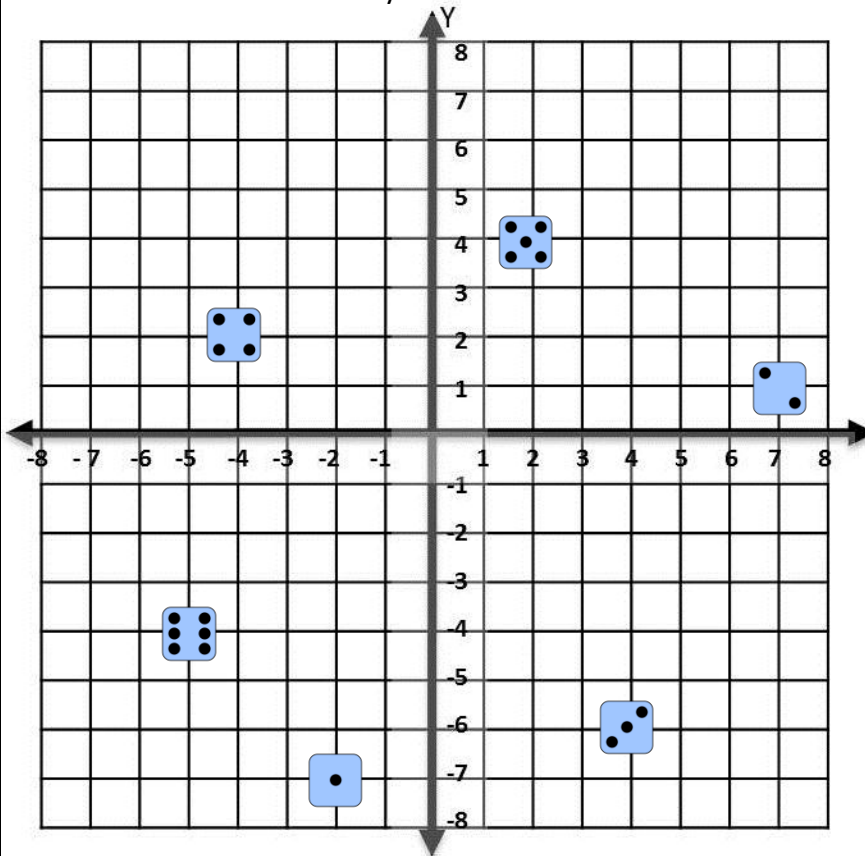


State the coordinates of the following:

- a)  (-3 , 1)
- b)  (-4 , -2)
- c)  (3 , 2)
- d)  (2 , 0)
- e)  (0 , -3)

Level 4 – Card 1

© BaysideTeacher



State the coordinates of the following:

a)  (,)

b)  (,)

c)  (,)

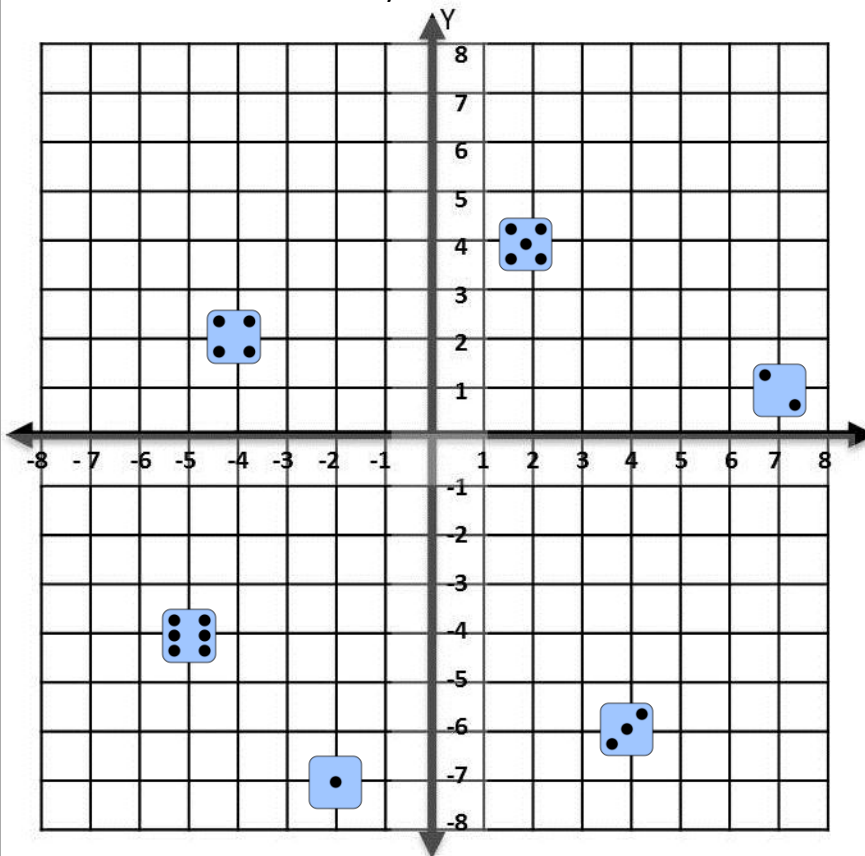
d)  (,)

e)  (,)

f)  (,)

Level 4 – Card 1 Answers

© BaysideTeacher



State the coordinates of the following:

a)  (-2 , -7)

b)  (7 , 1)

c)  (4 , -6)

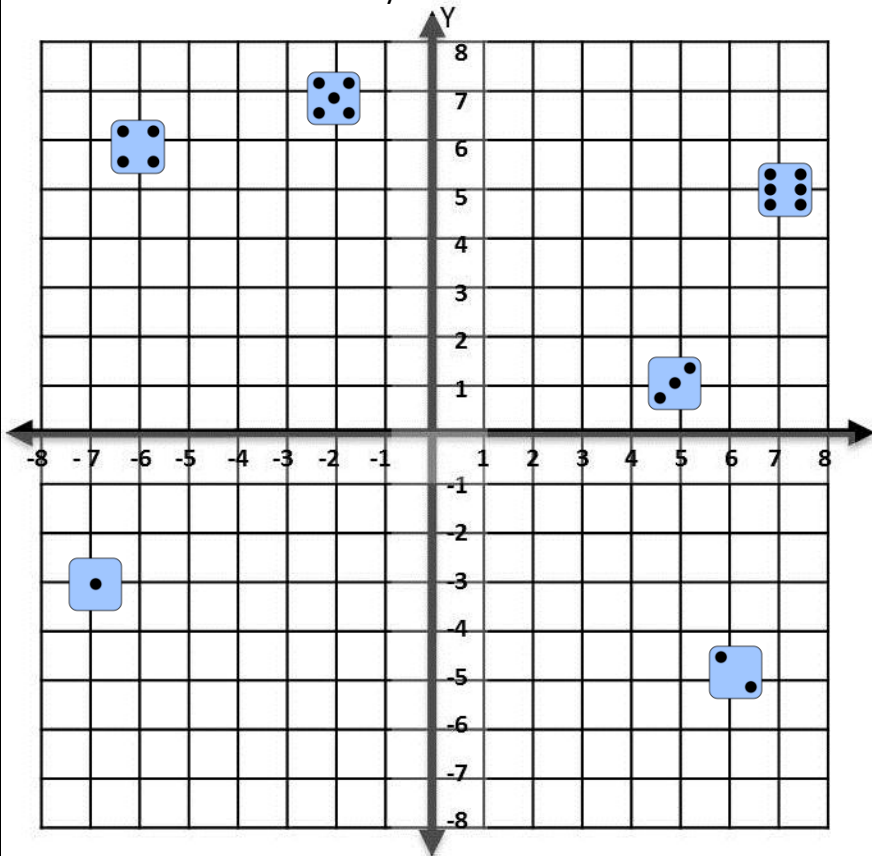
d)  (-4 , 2)

e)  (2 , 4)

f)  (-5 , -4)

Level 4 – Card 2

© BaysideTeacher



State the coordinates of the following:

a)  (,)

b)  (,)

c)  (,)

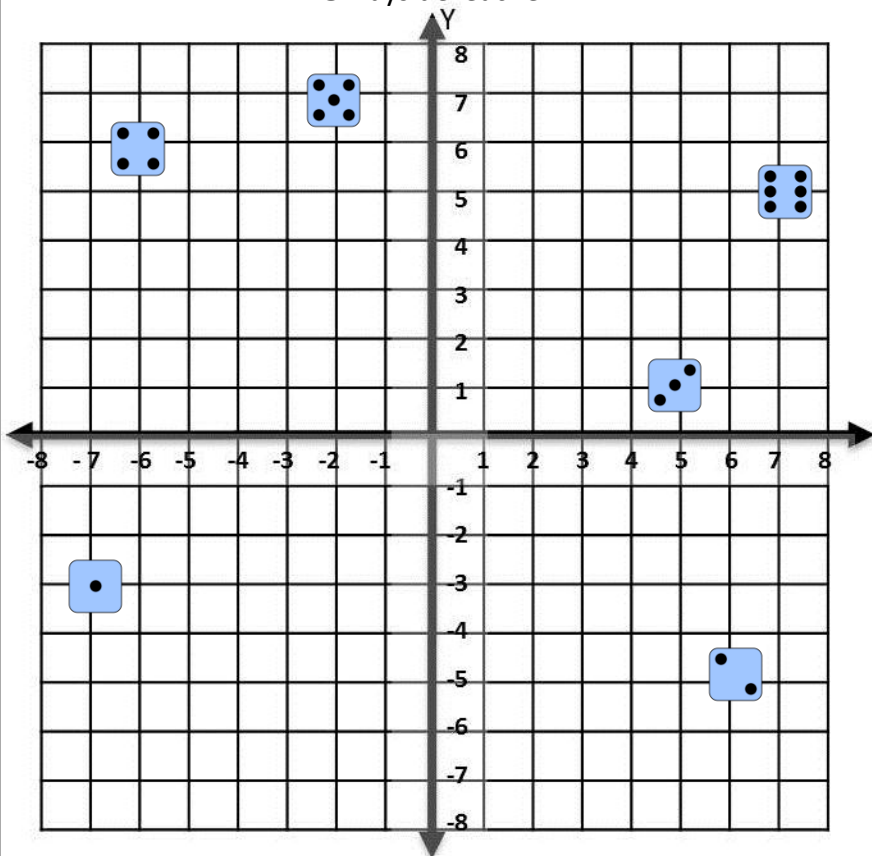
d)  (,)

e)  (,)


f)  (,)

Level 4 – Card 2 Answers

© BaysideTeacher





State the coordinates of the following:

a)  (-7 , -3)

b)  (6 , -5)

c)  (5 , 1)

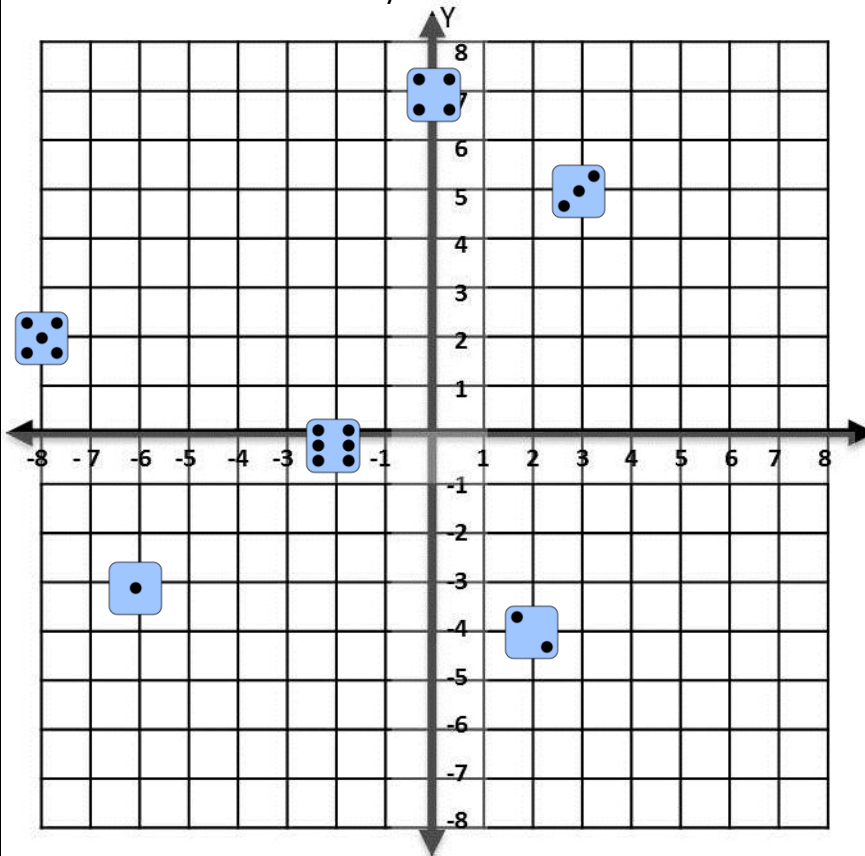
d)  (-6 , 6)

e)  (-2 , 7)

f)  (7 , 5)

Level 4 – Card 3

© BaysideTeacher



State the coordinates of the following:

a)  (,)

b)  (,)

c)  (,)

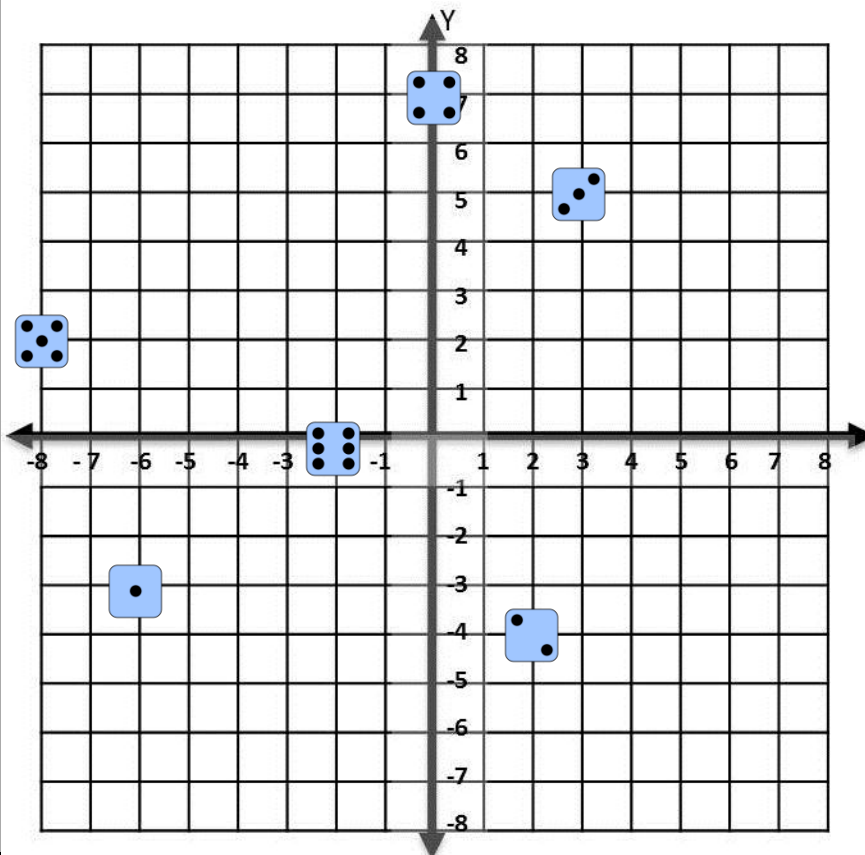
d)  (,)

e)  (,)

f)  (,)

Level 4 – Card 3 Answers

© BaysideTeacher



State the coordinates of the following:

a)  (-6 , -3)

b)  (2 , -4)

c)  (3 , 5)

d)  (0 , 7)

e)  (-8 , 2)

f)  (-2 , 0)